

# What's for lunch? (Page 1 of 3)



On page 3 there is a canteen price list. Use it to answer these questions.

1. Which costs the most? Circle your answer.

Ham sandwich      Small meat pie      Macaroni cheese

2. How much does a sausage roll cost? \_\_\_\_\_

Draw coins that would make this total.

3. How much does it cost to buy three chicken nuggets? \_\_\_\_\_

4. What coins could you use to pay for an apple?





# What's for lunch? (Page 2 of 3)

5. Find three things that cost less than \$2 each.

1. \_\_\_\_\_

2. \_\_\_\_\_

3. \_\_\_\_\_

6. Choose three things that you would like for lunch, write the price next to each of them and then add up the total.

Item	Price
------	-------

1. _____	_____
----------	-------

2. _____	_____
----------	-------


3. _____	_____
----------	-------

Total \_\_\_\_\_

Draw the coins that you could use to pay for the total of all three items.




# School Canteen Menu



## Sandwiches


Ham	\$2.50
Chicken	\$2.50
Super salad (v)	\$3.00
Buttered bread roll (v)	80c



## Fruit

Apple	75c
Banana	75c

(v) = Vegetarian



## Hot food



Chicken nuggets	50c each
Burger with salad	\$3.00
Small meat pie	\$1.20
Curried chicken pie	\$4.00
Sausage roll	\$2.80
Hot dog with sauce	\$2.50
Pizza – ham & cheese	\$2.50
Pizza – vegetarian (v)	\$2.00
Macaroni cheese (v)	\$3.50

## Drinks

Water – bottle	\$2.00
Milk – small carton	\$2.00

