


# My Australian coin knowledge (Page 1 of 2)

Answer the questions below to show your teacher how much you know about Australian coins.

1. Which side of the coin is being shown in each picture? Circle your answer.



HEADS      TAILS




HEADS      TAILS



HEADS      TAILS

4. What is the value of this coin? Circle your answer.




50c      \$1      \$2

5. Write the value of this coin using words.



I have \_\_\_\_\_

6. Write the value of this coin using numbers.



I have \_\_\_\_\_

2. Circle the cent symbol.      \$      c

3. Circle the dollar symbol.      \$      c



# My Australian coin knowledge (Page 2 of 2)

7. In the box below:

- Draw a circle around the coin with the highest value.
- Draw a square around the coin with the lowest value.
- Write the \$ symbol next to the dollar coins.
- Write the c symbol next to the cent coins.

