

What's for lunch?


On page 3 there is a canteen price list. Use it to answer these questions.

Which costs the most? Circle your answer.

Ham sandwich Small meat pie Macaroni cheese

How much does a sausage roll cost? _____

Draw coins that would make this total.



How much does it cost to buy three chicken nuggets? _____

What coins could you use to pay for an apple?



What's for lunch?

Find three things that cost less than \$2 each.

1. _____

2. _____

3. _____

Choose three things that you would like for lunch, write the price next to each of them and then add up the total.

Item	Price
------	-------


1. _____	_____
----------	-------

2. _____	_____
----------	-------


3. _____	_____
----------	-------

Total _____

Draw the coins that you could use to pay for the total of all three items.




School Canteen Menu



Sandwiches

Ham	\$2.50
Chicken	\$2.50
Super salad (v)	\$3.00
Buttered bread roll (v)	80c



Fruit

Apple	75c
Banana	75c



Drinks

Water – bottle	\$2.00
Milk – small carton	\$2.00



Hot food

Chicken nuggets	50c each
Burger with salad	\$3.00
Small meat pie	\$1.20
Curried chicken pie	\$4.00
Sausage roll	\$2.80
Hot dog with sauce	\$2.50
Pizza – ham & cheese	\$2.50
Pizza – vegetarian (v)	\$2.00
Macaroni cheese (v)	\$3.50



(v) = Vegetarian